

CCSS: 4.NF.7

**Directions:** For questions 15 through 20, use  $<$ ,  $>$ , or  $=$  to compare the decimals.

15.  $0.1$  \_\_\_\_\_  $0.15$

18.  $0.47$  \_\_\_\_\_  $0.4$

16.  $0.78$  \_\_\_\_\_  $0.75$



19.  $1.8$  \_\_\_\_\_  $1.80$

17.  $3.06$  \_\_\_\_\_  $3.16$

20.  $0.9$  \_\_\_\_\_  $0.09$

**Directions:** For questions 21 and 22, write the decimal represented by the shaded parts of each figure. Then use  $<$ ,  $>$ , or  $=$  to compare the decimals.

21.





Explain how the model shows the comparison.

---



---

22.



Explain how the model shows the comparison.

---



---

**Directions:** Use the following table to answer questions 9 through 12. For questions 9 through 11, use  $<$ ,  $>$ , or  $=$  to compare the decimals.

Hundreds	Tens	Ones	Decimal Point	Tenths	Hundredths
		0	.	5	6
		0	.	5	8
		0	.	5	3

9.  $0.56$  \_\_\_\_\_  $0.53$
10.  $0.58$  \_\_\_\_\_  $0.56$
11.  $0.53$  \_\_\_\_\_  $0.58$
12. What is the first place-value position in which the digits are different?  
\_\_\_\_\_
13. Which decimal has the **greatest** value?  
A. 1.3  
B. 1.13  
C. 0.03  
D. 1.31
14. Which decimal has the **least** value?  
A. 4.8  
B. 4.98  
C. 4.89  
D. 5.9